


Ukulele Quiz: Intervals (5 minutes, v. 1)


© James Hill

In each bar, name the notes and the interval between them.


www.ukuleleintheclassroom.com




A musical staff in treble clef with a key signature of one flat. The first two notes are C4 (middle C) and E4. Below the staff, the notes are labeled 'c' and 'e'. The interval between them is labeled 'Major 3rd'. The remaining six bars of the staff contain blank lines for the student to write the notes and interval.




A musical staff in treble clef with a key signature of one flat. The staff contains blank lines for the student to write the notes and interval.




A musical staff in treble clef with a key signature of one flat. The staff contains blank lines for the student to write the notes and interval.



A musical staff in treble clef with a key signature of one flat. The staff contains blank lines for the student to write the notes and interval.



A musical staff in treble clef with a key signature of one flat. The staff contains blank lines for the student to write the notes and interval.



A musical staff in treble clef with a key signature of one flat. The staff contains blank lines for the student to write the notes and interval.